




Counting to 50

Fill in the missing numbers.

	1	2	3		5	6
7	8	9		11	12	
13		15		17	18	19
	20		22	23	24	25
26		28	29	30	31	
32		34	35	36	37	
	39	40	41	42		44
45	46		48	49	50	

Odd and Even Numbers

Circle all of the **even** numbers.
Put an **X** through all the **odd** numbers.

7

50

13

42

121

24

112

56

67

78

98

23

234

64

533

45

612

34



Odd and Even Numbers

Look at these three numbers:

2 7 8

Sort them to make the **largest even number** you can.

Sort them to make the **largest odd number** you can.

Sort them to make the **smallest even number** you can.

Now look at these four numbers:

2 5 9 4

Use them to make six different two-digit even numbers:

<input type="text"/>	<input type="text"/>	<input type="text"/>	<input type="text"/>	<input type="text"/>	<input type="text"/>
----------------------	----------------------	----------------------	----------------------	----------------------	----------------------

Even or Odd?

Below are a lot of numbers that are multiples of 5.
Write them under the proper column.

[illegible]

5

10

15

20

25

30

35

40

45

50

55

60

Skip-Counting by 2s

Fill in the missing numbers by skip-counting by 2s.

2

6

12

18

20

26

34

40

54


60

62




Pictograph

dragonfly



ant



fly



bee







Use the pictograph above to solve the following problems:

How many flies are there? _____

Which group of bugs is the smallest? _____




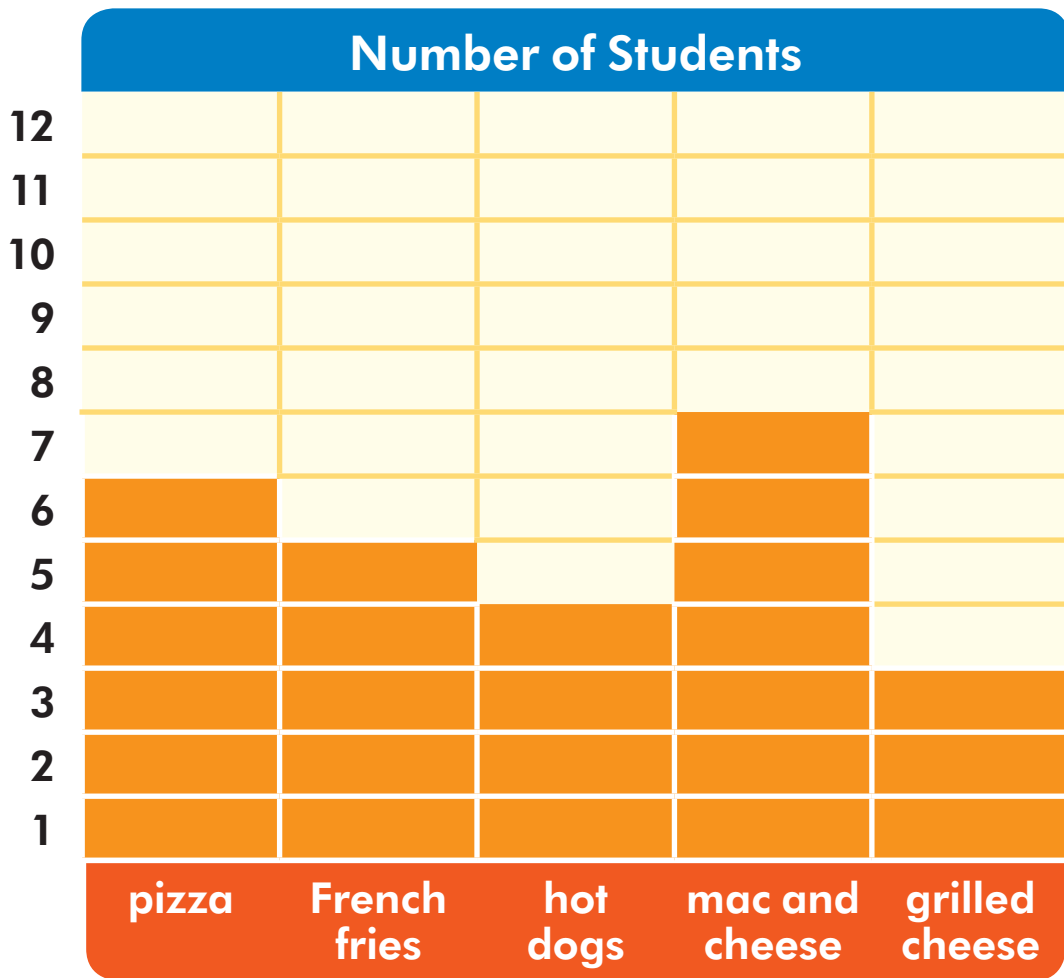
Which group of bugs is the largest? _____

 = _____ +  = _____ = _____

 = _____ +  = _____ = _____

Bar Graph

Mrs. Bucci asked her students what their favorite foods for lunch are and put them in a bar graph. Answer the questions below using the information from the graph.



How many students love pizza?

What is the students' favorite food?

How many more people like mac and cheese than hot dogs?

How many people like both French fries and pizza?